


Steps for Depth



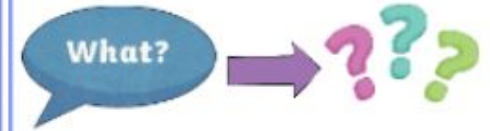
What's the same?
What's different?



The answer is _____.
What was the question?



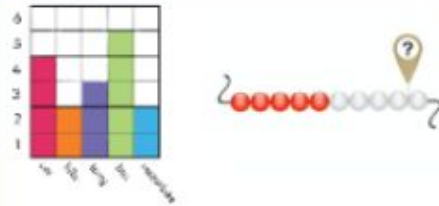
Write a maths story for
this equation.



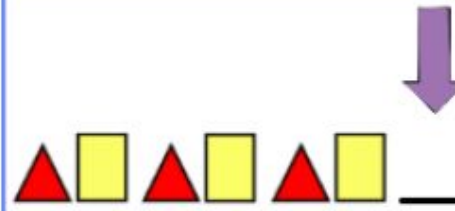
What would happen if ___?
Finish the sentence
and prove it.



Create a 'spot the
mistake'.



How could this be shown
with a diagram or concrete
materials?



Find the pattern.



Create a pictorial
representation.